

Focus Words:





On your red and blue lines, write the following words in sentences. You can have more than one word in one sentence.

always	addition	might
children	little	





Number Facts: Choose one of the strategies to answer the number facts - Doubles + 1 OR Doubles - 1

	Monday	Tuesday	Wednesday	Thursday
$4 + 5 = 9$				
$6 + 7 = 13$				
$2 + 3 = 5$				
$9 + 10 = 19$				
$7 + 8 = 15$				
$3 + 4 = 7$				
$10 + 11 = 21$				
$8 + 9 = 17$				
$1 + 2 = 3$				
$5 + 6 = 11$				

Maths: Grids

				
				
				
				
2				
1				
	A	B		

1. Finish labelling the axis on the grid
2. Place these shapes in their locations:

			
A6	C3	D4	B1

3. Write the locations of these shapes:

