

Focus Words:

On your red and blue lines, write the following words in sentences. You can have more than one word in one sentence.

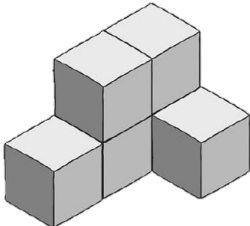
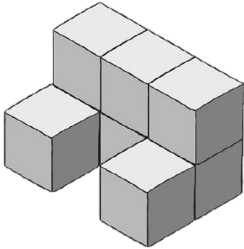
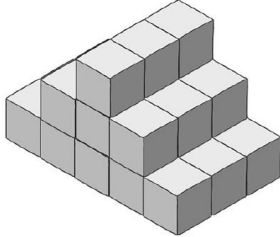
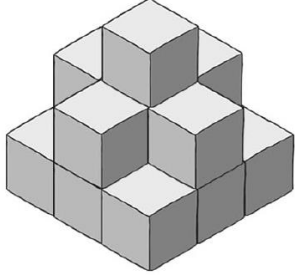
<i>secondly</i>	<i>however</i>	<i>another</i>
<i>weekend</i>	<i>thousand</i>	

Number Facts: Doubles + 1

	<i>Monday</i>	<i>Tuesday</i>	<i>Wednesday</i>	<i>Thursday</i>
$1 + 2 = 3$				
$2 + 3 = 5$				
$3 + 4 = 7$				
$4 + 5 = 9$				
$5 + 6 = 11$				
$6 + 7 = 13$				
$7 + 8 = 15$				
$8 + 9 = 17$				
$9 + 10 = 19$				
$10 + 11 = 21$				

Maths: Spatial Awareness.

How many cubes make this object? Write the amount underneath the object. Remember to use the word cubes in your answer.

			
---	---	--	---