

Year Three Homework Week 5, Term 1

Due Date: 23rd February, 2018

Focus Words:




On your red and blue lines, write the following words in sentences. You can have more than one word in one sentence.

<u>absolutely</u>	<u>certainly</u>	<u>must</u>
<u>February</u>		<u>twelve</u>

Number Facts: Doubles (Another example is Double 3 = 6)

	<u>Monday</u>	<u>Tuesday</u>	<u>Wednesday</u>	<u>Thursday</u>
$1 + 1 = 2$				
$2 + 2 = 4$				
$3 + 3 = 6$				
$4 + 4 = 8$				
$5 + 5 = 10$				
$6 + 6 = 12$				
$7 + 7 = 14$				
$8 + 8 = 16$				
$9 + 9 = 18$				
$10 + 10 = 20$				

Maths: Shapes

<p>Compound Shapes - Write down the two 2D shapes used to make the compound shape.</p>  <p>The two shapes are:</p>	<p>List the properties of the 3D shapes below.</p> <p>Name of shape:</p> <p>Faces: _____</p> <p>Edges: _____</p> <p>Vertices: _____</p> 
 <p>The two shapes are:</p>	<p>Name of shape:</p> <p>Faces: _____</p> <p>Edges: _____</p> <p>Vertices: _____</p> 