





Spelling Words	Math Concept: Calculating Change	Term 3, Week 3
drought	<p>1. Rosemary went to the shop and purchased these items.   Toy elephant - \$6.40 Toy plane - \$5.15 How much money did she spend? _____</p> <p>2. What two notes could Rosemary use to pay for the toys in question 1? _____</p> <p>3. Brendan had \$20. He bought a toy truck for \$16.30. How much change should he be given?</p>	
saddle		
outback		
mustering		
stockman		

Reading Log	Name of Book and Pages Read	Parent Signature
Monday		
Tuesday		
Wednesday		
Thursday		

Spelling Words	Math Concept: Calculating Change	Term 3, Week 3
drought	<p>1. Rosemary went to the shop and purchased these items.   Toy elephant - \$6.40 Toy plane - \$5.15 How much money did she spend? _____</p> <p>2. What two notes could Rosemary use to pay for the toys in question 1? _____</p> <p>3. Brendan had \$20. He bought a toy truck for \$16.30. How much change should he be given?</p>	
saddle		
outback		
mustering		
stockman		

Reading Log	Name of Book and Pages Read	Parent Signature
Monday		
Tuesday		
Wednesday		
Thursday		