





Spelling Words	Math Concept: Division	Term 2, Week
<b>Angrily</b>	Use equal groups to solve the following problems. $24 \div 4 =$	Draw an array to solve the following problems. $18 \div 3 =$
<b>Nervously</b>		
<b>Quickly</b>		
<b>Lazily</b>	Use the arrays to solve the division problems.	
		18 children were divided equally into 6 groups. How many children were in each group?
		$\square \div \square = \square$
<b>Gently</b>		5 children who were collecting stamps, were given 20 stamps to share equally. How many stamps did each child receive?
		$\square \div \square = \square$
Reading Log	Name of Book and Pages Read	Parent Signature
Monday		
Tuesday		
Wednesday		
Thursday		

Spelling Words	Math Concept: Division	Term 2, Week
<b>Angrily</b>	Use equal groups to solve the following problems. $24 \div 4 =$	Draw an array to solve the following problems. $18 \div 3 =$
<b>Nervously</b>		
<b>Quickly</b>		
<b>Lazily</b>	Use the arrays to solve the division problems.	
		18 children were divided equally into 6 groups. How many children were in each group?
		$\square \div \square = \square$
<b>Gently</b>		5 children who were collecting stamps, were given 20 stamps to share equally. How many stamps did each child receive?
		$\square \div \square = \square$
Reading Log	Name of Book and Pages Read	Parent Signature
Monday		
Tuesday		
Wednesday		
Thursday		